

© International Baccalaureate Organization 2021

All rights reserved. No part of this product may be reproduced in any form or by any electronic or mechanical means, including information storage and retrieval systems, without the prior written permission from the IB. Additionally, the license tied with this product prohibits use of any selected files or extracts from this product. Use by third parties, including but not limited to publishers, private teachers, tutoring or study services, preparatory schools, vendors operating curriculum mapping services or teacher resource digital platforms and app developers, whether fee-covered or not, is prohibited and is a criminal offense.

More information on how to request written permission in the form of a license can be obtained from <https://ibo.org/become-an-ib-school/ib-publishing/licensing/applying-for-a-license/>.

© Organisation du Baccalauréat International 2021

Tous droits réservés. Aucune partie de ce produit ne peut être reproduite sous quelque forme ni par quelque moyen que ce soit, électronique ou mécanique, y compris des systèmes de stockage et de récupération d'informations, sans l'autorisation écrite préalable de l'IB. De plus, la licence associée à ce produit interdit toute utilisation de tout fichier ou extrait sélectionné dans ce produit. L'utilisation par des tiers, y compris, sans toutefois s'y limiter, des éditeurs, des professeurs particuliers, des services de tutorat ou d'aide aux études, des établissements de préparation à l'enseignement supérieur, des fournisseurs de services de planification des programmes d'études, des gestionnaires de plateformes pédagogiques en ligne, et des développeurs d'applications, moyennant paiement ou non, est interdite et constitue une infraction pénale.

Pour plus d'informations sur la procédure à suivre pour obtenir une autorisation écrite sous la forme d'une licence, rendez-vous à l'adresse <https://ibo.org/become-an-ib-school/ib-publishing/licensing/applying-for-a-license/>.

© Organización del Bachillerato Internacional, 2021

Todos los derechos reservados. No se podrá reproducir ninguna parte de este producto de ninguna forma ni por ningún medio electrónico o mecánico, incluidos los sistemas de almacenamiento y recuperación de información, sin la previa autorización por escrito del IB. Además, la licencia vinculada a este producto prohíbe el uso de todo archivo o fragmento seleccionado de este producto. El uso por parte de terceros —lo que incluye, a título enunciativo, editoriales, profesores particulares, servicios de apoyo académico o ayuda para el estudio, colegios preparatorios, desarrolladores de aplicaciones y entidades que presten servicios de planificación curricular u ofrezcan recursos para docentes mediante plataformas digitales—, ya sea incluido en tasas o no, está prohibido y constituye un delito.

En este enlace encontrará más información sobre cómo solicitar una autorización por escrito en forma de licencia: <https://ibo.org/become-an-ib-school/ib-publishing/licensing/applying-for-a-license/>.

**Economics  
Higher level  
Paper 3**

Monday 10 May 2021 (morning)

Candidate session number

1 hour

--	--	--	--	--	--	--	--	--	--

**Instructions to candidates**

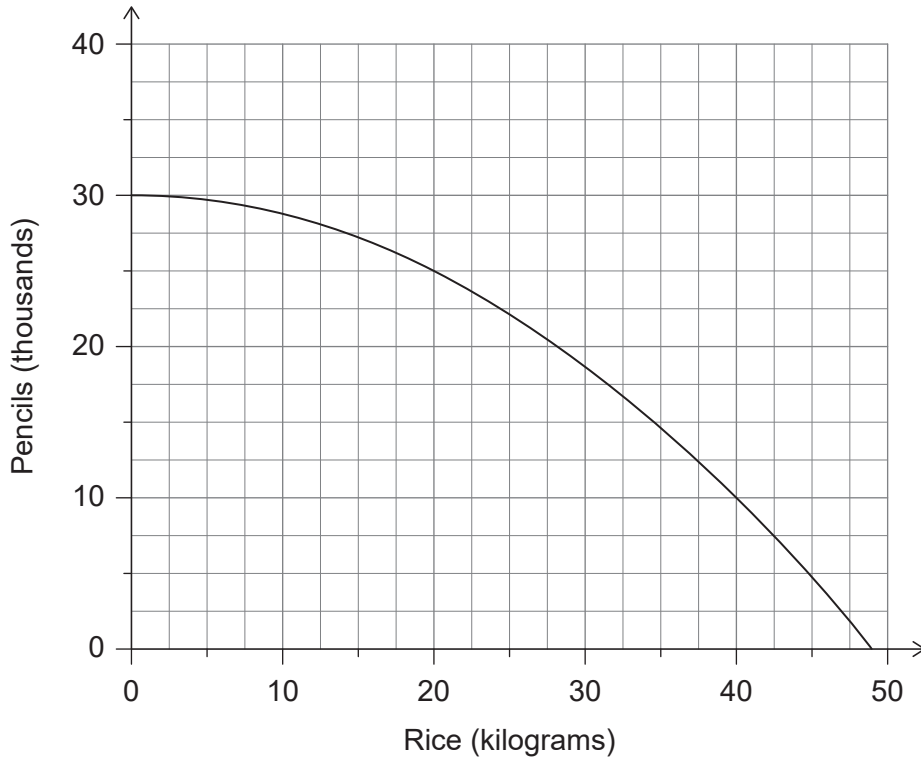
- Write your session number in the boxes above.
- You are permitted access to a calculator for this paper.
- Do not open this examination paper until instructed to do so.
- Answer two questions.
- Answers must be written within the answer boxes provided.
- Unless otherwise stated in the question, all numerical answers must be given exactly or correct to two decimal places.
- You must show all your working.
- The maximum mark for this examination paper is **[50 marks]**.



Answer **two** questions. Each question is worth [25 marks]. Answers must be written within the answer boxes provided.

- 1. **Figure 1** illustrates the production possibilities for rice and pencils in Country H. Resources in Country H are fully employed.

**Figure 1**



- (a) Assuming that 25 000 pencils are produced initially, identify the opportunity cost for Country H if the production of rice is to be increased by 100%. [1]

.....

.....

- (b) State **one** reason why the production possibility curve (frontier) for Country H might shift outwards. [1]

.....

.....

(This question continues on the following page)



(Question 1 continued)

Table 1 provides information about Good X and Good Y, which are related goods.

Table 1

	Good X		Good Y	
	Price (\$)	Quantity demanded	Price (\$)	Quantity demanded
Year 1	12	320	8	400
Year 2	14	290	8	420

(c) Using Table 1, calculate the cross price elasticity of demand between Good X and Good Y when the price of Good X increases.

[2]

.....

.....

.....

.....

The demand for Good Z is income inelastic.

(d) Define the term *income inelastic demand*.

[2]

.....

.....

.....

.....

(This question continues on the following page)



**(Question 1 continued)**

Country D is an economically less developed country that specializes in the production of primary products.

- (e) Explain **two** implications for Country D of a relatively low income elasticity of demand for its primary products.

[4]

.....

.....

.....

.....

.....

.....

.....

.....

**(This question continues on the following page)**



**(Question 1 continued)**

Good A and Good B are in joint supply.

- (f) Using a diagram to support your answer, explain the impact on the market for Good B of an increase in the price of Good A.

[4]

.....

.....

.....

.....

.....

.....

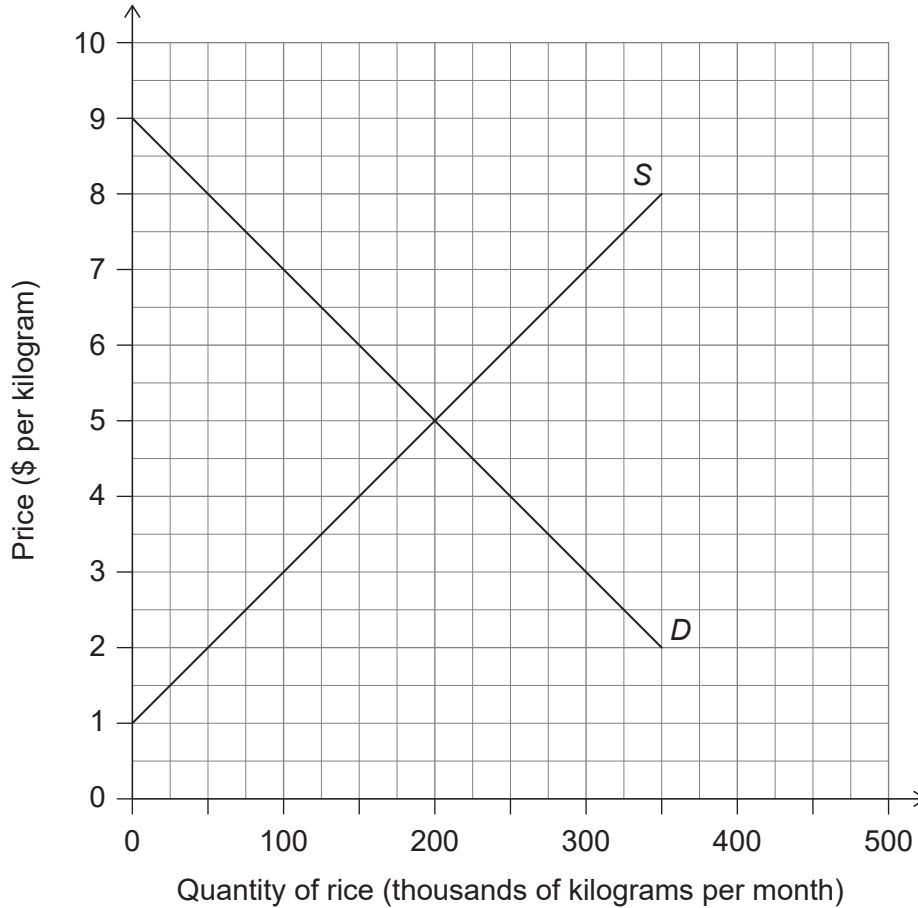
**(This question continues on the following page)**



(Question 1 continued)

Figure 2 illustrates Islandia's demand (*D*) for and supply (*S*) of rice.

Figure 2



The government of Islandia wants to reduce the price of rice by 40% in order to enable low-income households to buy enough rice to meet their needs. The government decides to achieve this by imposing a maximum price.

(g) Calculate the shortage resulting from the imposition of the maximum price. [1]

.....
.....

(This question continues on the following page)



**(Question 1 continued)**

- (h) Calculate the change in producer surplus resulting from the imposition of the maximum price.

[2]

.....  
.....  
.....  
.....

- (i) Calculate the change in consumer expenditure on rice resulting from the imposition of the maximum price.

[2]

.....  
.....  
.....  
.....

**(This question continues on the following page)**





**(Question 1 continued)**

The government of Islandia realises that when a maximum price is set below the equilibrium price, a method of non-price rationing is necessary. Critics of the maximum price policy argue that it might result in the creation of a parallel market.

- (j) State **two** methods of non-price rationing. [2]

.....

.....

.....

.....

- (k) With reference to **Figure 2**, outline why the imposition of a maximum price might lead to the creation of a parallel market. [2]

.....

.....

.....

.....

- (l) Explain **one** reason, apart from the possible creation of a parallel market, why the imposition of a maximum price for rice in Islandia might not enable low-income households to buy enough rice to meet their needs. [2]

.....

.....

.....

.....



2. **Table 2** provides information relating to the country of Averno in 2019.

**Table 2**

	<b>\$ (million)</b>
Exports of goods and services	462
Subsidies	681
Consumer expenditure	2350
Indirect taxation	759
Investment expenditure	1380
Wages and salaries	3695
Government expenditure on unemployment benefits	487
Imports of goods and services	476
Government expenditure on goods and services	1624

(a) Calculate Averno's nominal gross domestic product (GDP) in 2019. [2]

.....
.....
.....
.....

(This question continues on the following page)



**(Question 2 continued)**

In 2019, the population of Averno is 213 600, while the GDP deflator is 125.

(b) (i) Define the term *price deflator*. [2]

.....  
.....  
.....  
.....

(ii) Using your answer to part (a), calculate Averno's real GDP per capita in 2019. [2]

.....  
.....  
.....  
.....

(iii) Explain **two** reasons why an increase in real GDP per capita may not lead to an improvement in living standards. [4]

.....  
.....  
.....  
.....  
.....  
.....  
.....  
.....

**(This question continues on the following page)**



(Question 2 continued)

Table 3 provides information relating to the labour market in the country of Buranda.

Table 3

Population (million)	Employed (million)	Unemployed (million)
9.3	5.7	1.2

(c) Calculate the unemployment rate in Buranda. [2]

.....

.....

.....

.....

(d) Define the term *underemployment*. [2]

.....

.....

.....

.....

(This question continues on the following page)



(Question 2 continued)

Table 4 provides data relating to Country Y.

Table 4

	Unemployment rate (%)	Inflation rate (%)
2011	6.3	4.2
2012	6.8	3.5
2013	7.2	3.2
2014	6.5	3.7
2015	5.9	4.1
2016	5.5	4.8
2017	6.4	5.7
2018	7.8	7.4

(e) Identify a period in which Country Y experienced disinflation. [1]

.....  
.....

(f) (i) With reference to the short-run Phillips curve, describe the relationship between inflation and unemployment in Country Y for the period 2011 to 2016. [2]

.....  
.....  
.....  
.....

(ii) Outline how the data for the period 2016 to 2018 may reflect a change in the short-run Phillips curve for Country Y. [2]

.....  
.....  
.....  
.....

(This question continues on the following page)



(Question 2 continued)

Table 5 provides information relating to the country of Buranda.

Table 5

	Index of export prices	Index of import prices
2008	106.5	108.9
2018	107.2	124.3

(g) (i) Calculate Buranda's terms of trade index for 2008 and 2018. [2]

.....

.....

.....

.....

(ii) Using your answers to part (g)(i), explain how the change in Buranda's terms of trade may act as a barrier to economic development. [4]

.....

.....

.....

.....

.....

.....

.....

.....



3. Note that a widget is an imaginary product.

In the country of Laurania, the widget industry operates as an oligopoly. The Minister for Finance is worried that the firms in the industry might abuse their power by acting together as a monopoly, and has said that the industry's concentration ratio is cause for concern.

(a) Outline how a concentration ratio might be used to identify an oligopoly. [2]

.....

.....

.....

.....

(b) Using a diagram to support your answer, explain how monopoly power can create a welfare loss. [4]

.....

.....

.....

.....

(This question continues on the following page)



**(Question 3 continued)**

(c) State **two** government responses to the abuse of monopoly power. [2]

.....

.....

.....

.....

It has been observed that the law of diminishing returns operates in the widget industry.

(d) Outline the law of diminishing returns. [2]

.....

.....

.....

.....

**(This question continues on the following page)**

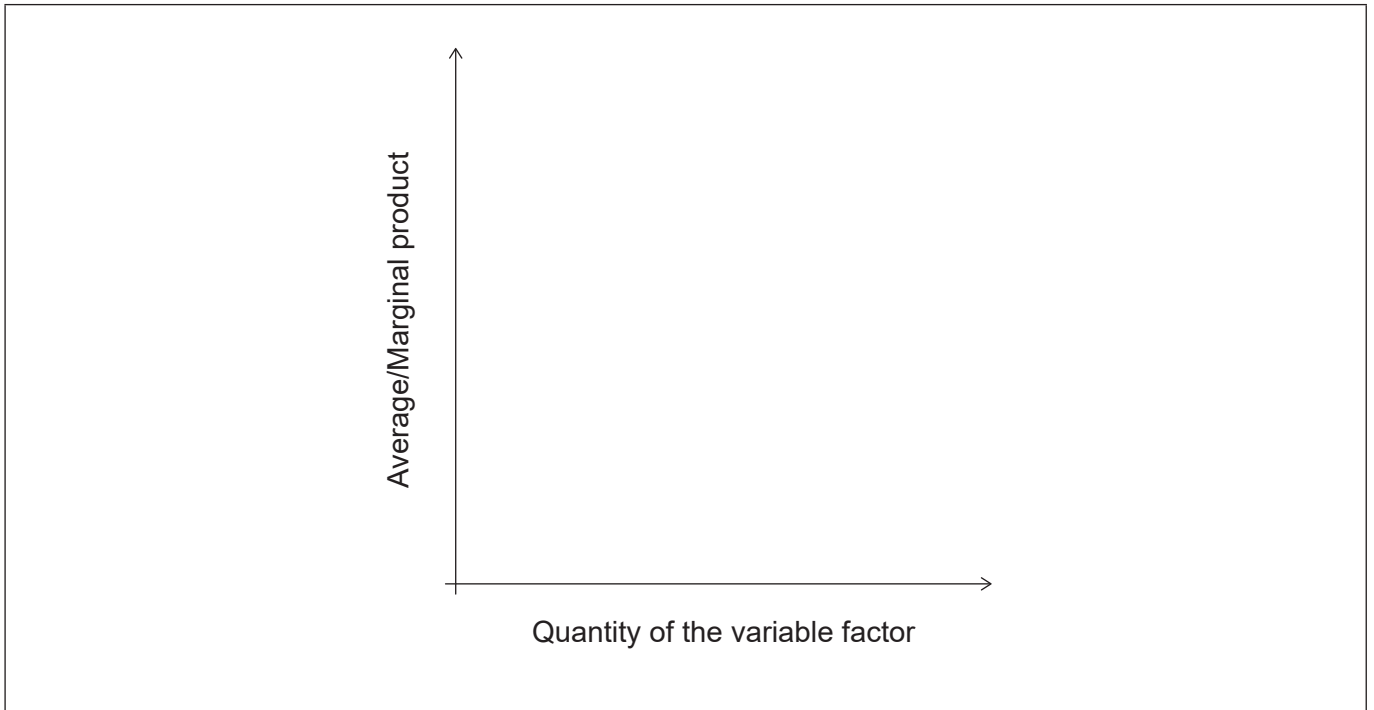




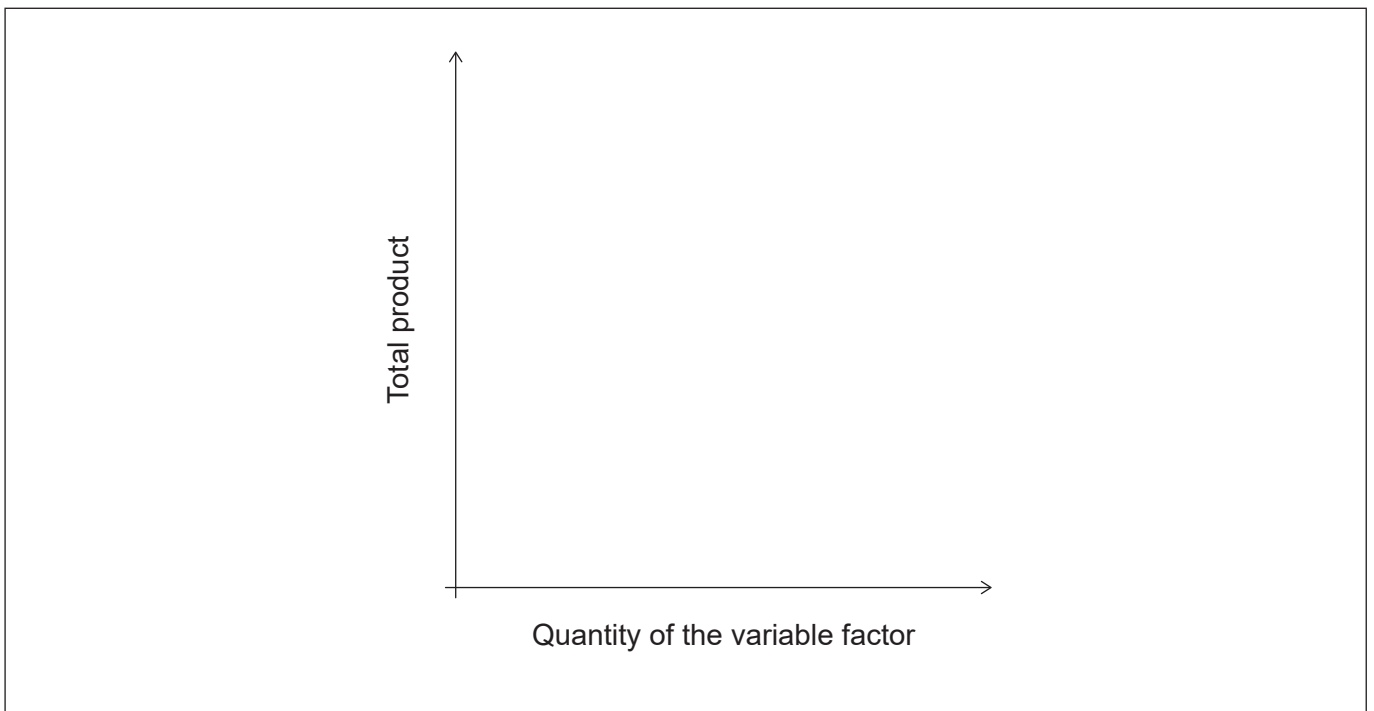
**(Question 3 continued)**

A firm operates under conditions of diminishing returns.

- (e) (i) Sketch the marginal product (*MP*) **and** average product (*AP*) curves for this firm. [2]



- (ii) Sketch the total product (*TP*) curve for this firm. [1]



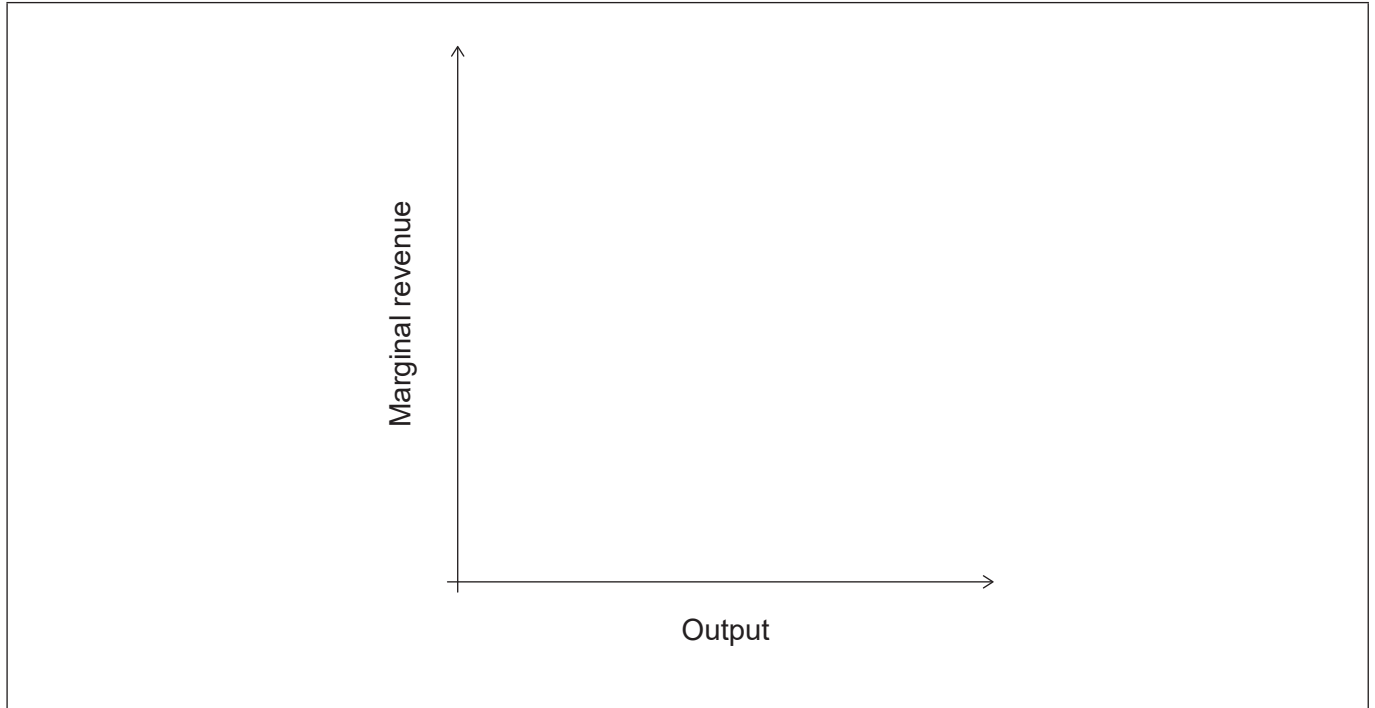
**(This question continues on the following page)**



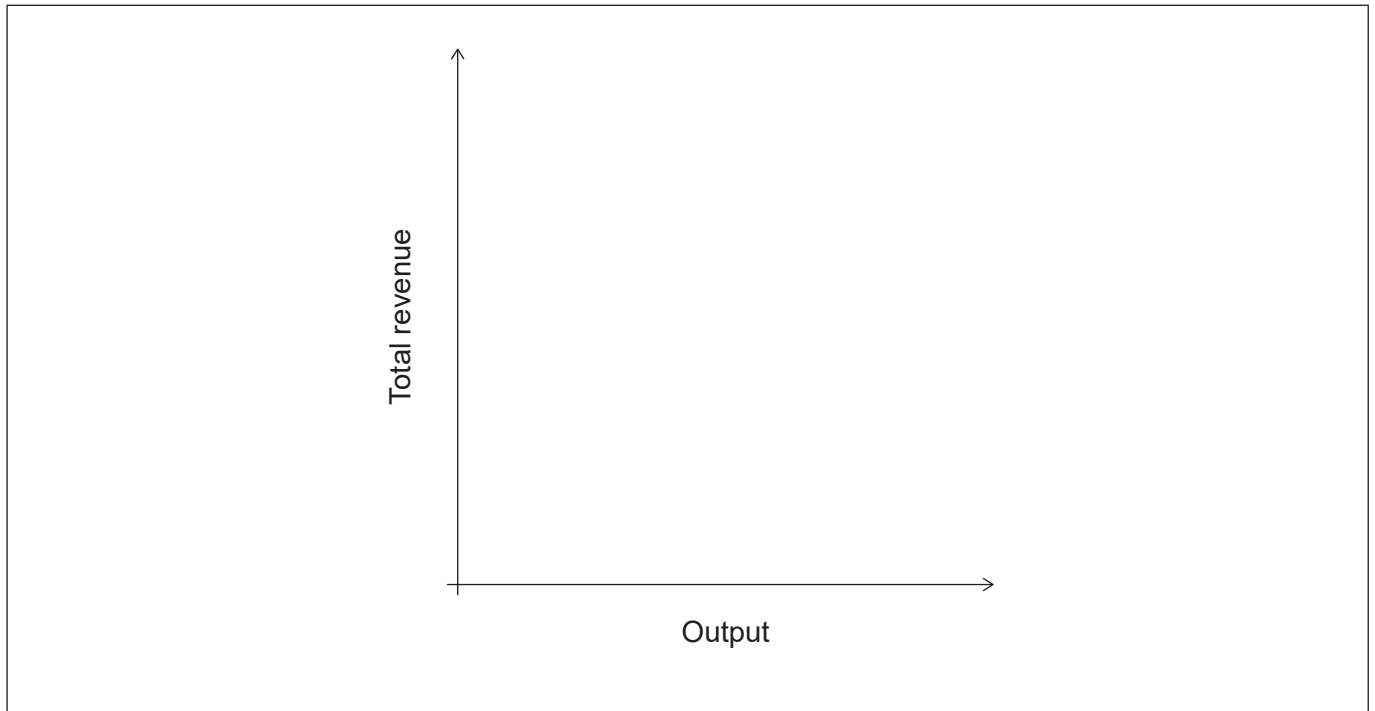
**(Question 3 continued)**

The demand curve faced by firms in the widget industry is downward sloping.

- (f) (i) Sketch the marginal revenue (*MR*) curve for firms in the widget industry. [1]



- (ii) Sketch the total revenue (*TR*) curve for firms in the widget industry. [1]



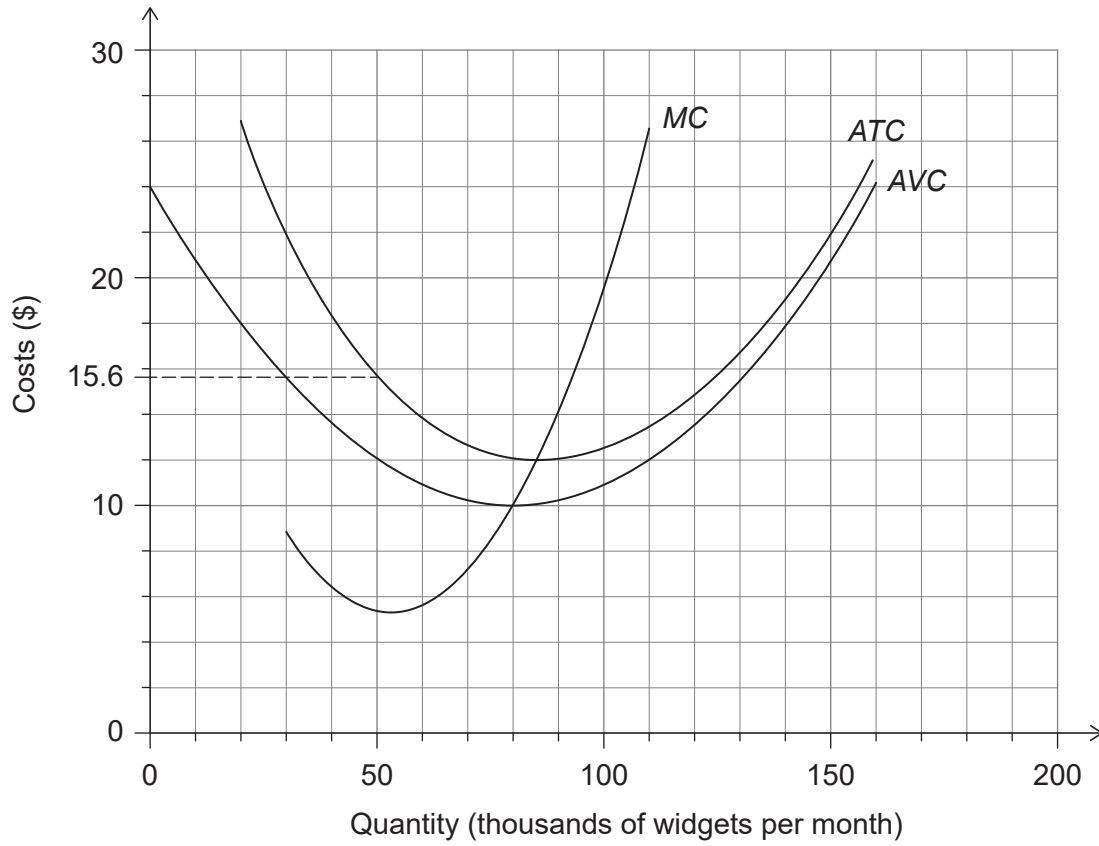
**(This question continues on the following page)**



(Question 3 continued)

Figure 3 shows the marginal cost (MC) curve, the average variable cost (AVC) curve and the average total cost (ATC) curve for a firm in the widget industry.

Figure 3



(This question continues on the following page)



**(Question 3 continued)**

(g) (i) Calculate the firm's total variable costs if output is 20 000 widgets per month. [1]

.....  
.....

(ii) Identify the level of output at which the firm would achieve productive efficiency. [1]

.....  
.....

(iii) Calculate the firm's monthly total fixed costs if output equals 50 000 units per month. [2]

.....  
.....  
.....  
.....

One firm in the widget industry uses the practice of price discrimination, charging a lower price to one group of consumers than to another group, even though there is no difference in the cost of supplying to each group.

(h) (i) State **two** conditions necessary for price discrimination to take place. [2]

.....  
.....  
.....  
.....

**(This question continues on the following page)**



**(Question 3 continued)**

- (ii) Using a diagram (or diagrams), explain why a profit maximizing firm might charge a higher price in one market than in another.

[4]

.....

.....

.....

.....

.....

.....

